

Name: _____

Date: _____

GRADE 1 MATH STUDY GUIDE CHAPTER 3: DATA MANAGEMENT

Sort and Make a Picture Graph

Sort the **shoes** into two groups and glue them on the graph below.

Write the title and labels on the graph.






My Title: _____

Make a Pictograph

Look at the tally mark chart. Use the information from the tally mark chart to make a pictograph with pizza pictures.

Do You Like Meat Or Vegetable Pizza?



meat pizza	vegetable pizza
	



Meat or Vegetable Pizza?

Meat
Pizza

--	--	--	--	--

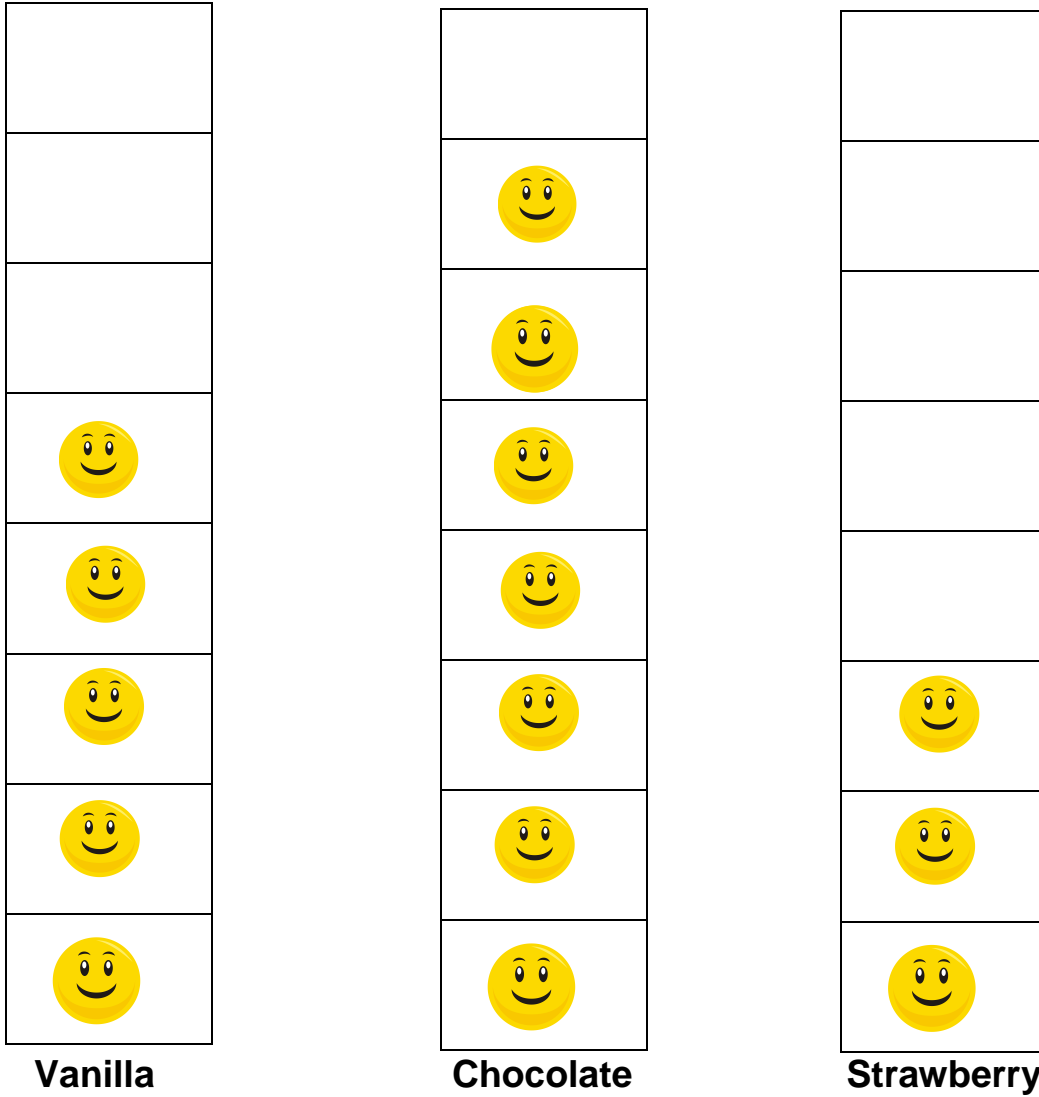
Vegetable
Pizza

--	--	--	--	--

Interpret a Pictograph



Favorite Ice Cream Flavors



1. How many kids like vanilla? _____
2. How many more kids like chocolate than strawberry? _____
3. How many kids voted? _____

Conduct Your Own Yes/No Survey

Write a yes/no question you can ask your classmates.

My **yes/no question** is:

Ask **10** kids in the class your question and record their answer on the tally chart using tally marks.

Tally Chart

YES	NO

How many kids said **YES**? _____

How many kids said **NO**? _____

Did **more** kids answer **YES** or **NO**? _____

Shoes for page 1

